



GOVERNMENT OF INDIA : DEPARTMENT OF SPACE  
**INDIAN SPACE RESEARCH ORGANISATION**

ISRO Centralised Recruitment Board

Written Test for Recruitment to the post of Scientist/Engineer 'SC', 2018


Test Booklet		<b>ELECTRONICS</b>	<b>C</b>
Date	:	April 22, 2018 (Sunday)	
Time	:	0900 Hrs. to 1030 Hrs.	
Test Duration (Minutes)	:	90	
No. of Questions	:	80	
No. of Pages (Other than cover sheet)	:	26	

**Instructions to the candidate**

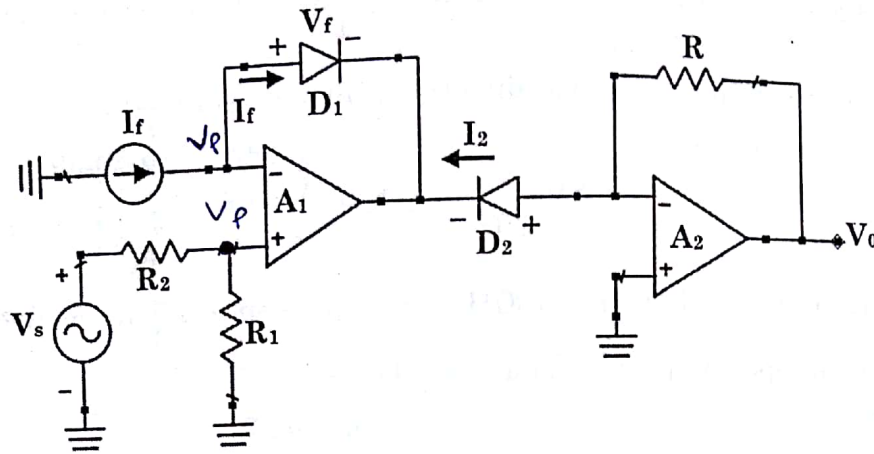
1. The question paper is in the form of test booklet. All candidates will be assessed on identical questions.
2. A separate **OMR** answer sheet with carbon impression is provided to all candidates for answering. After completion of the test, the carbon impression of the OMR sheet will be detached and handed over to candidate by the invigilator which should be carefully retained by the candidate for all future reference.
3. Each objective question is provided with a text and/or figures wherever applicable with **multiple answer choices (a), (b), (c) and (d)**. Only one of them is correct.
4. Read the instructions on the **OMR** sheet carefully. Use only **Blue or Black Ink Ball Point Pen** for writing on OMR sheet and marking your answers.
5. All objective type questions carry equal marks of **THREE** for a correct answer, **ZERO** for no answer and minus **ONE** for a wrong answer.
6. **Multiple answers** for a question will be regarded as a wrong answer.
7. Although the test stresses on accuracy more than speed, it is important for you to use your time as effectively as possible.
8. Do not waste time on questions, which are too difficult for you. You can go on to other questions and come back to the difficult ones later.
9. Question booklets have been marked with **A** or **B** or **C** or **D** or **E** on the right hand top corner, which is mandatory to be written on the OMR sheet in the box and bubbled appropriately, failing which, the answer sheet will not be evaluated.
10. Space available in the booklet could be used for rough work, if required. No separate sheet will be provided.
11. Before signing the attendance sheet, the candidate should write the Booklet Code in the attendance sheet. Candidates should sign against THEIR names only.
12. **At the end of the test (1) Written Test Call Letter(s) with photograph pasted on it and (2) OMR Answer Sheet shall be returned to the Invigilator and shall not be carried by the candidate under any circumstances.**

\*\*\*

BE001

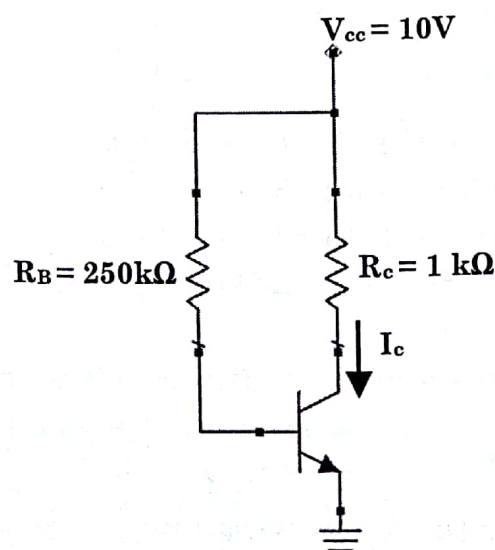


1. The circuit shown in the fig. below is a:



(A<sub>1</sub> & A<sub>2</sub> are ideal op-amps)

- (a) Logarithmic Multiplier (b) Logarithmic Amplifier  
(c) Antilog Amplifier (d) None of the above
2. Determine the change in collector current,  $\Delta I_c$  due to change in base emitter voltage  $V_{BE}$  from 25°C to 100°C for a Silicon Transistor in Fixed Bias Configuration having  $\beta = 100$ .  
(Consider following variation in Silicon transistor parameters with temperature-  
At T= 25°C,  $V_{BE} = 0.65$  V and At T = 100°C,  $V_{BE} = 0.5$  V)



- (a) 60  $\mu$ A  
(c) 15  $\mu$ A

- (b) 30  $\mu$ A  
(d) 120  $\mu$ A

$$I_B = \frac{10 - 0.65}{250k}$$

$$I_C = 100 \left( \frac{10 - 0.65}{250k} \right)$$

$$I_C = 100 \left( \frac{10 - 0.5}{250k} \right)$$

$$\frac{2.109}{250k} \left( 0.18 \right)$$

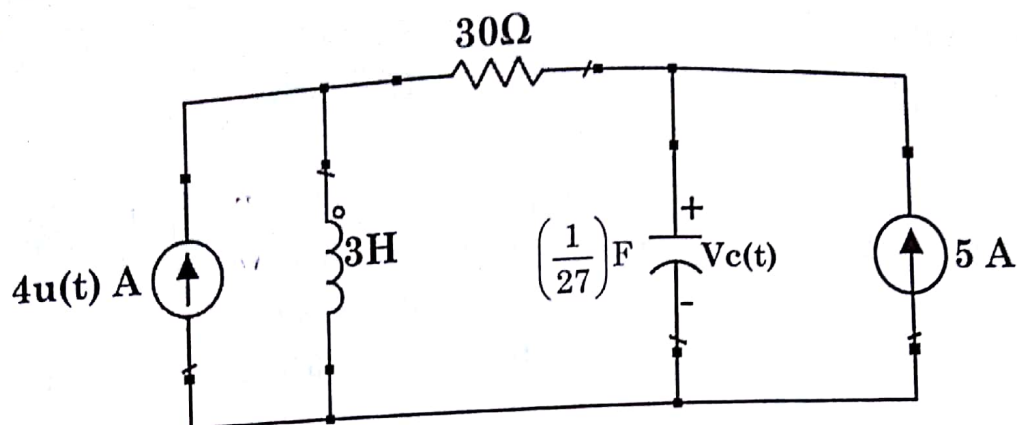


- 
- The graph shows Voltage (V) on the vertical axis and Current (I) on the horizontal axis. The curve starts at a constant voltage level (labeled 'A') and then decreases linearly (labeled 'B') until it reaches the 'Rated Current' on the I-axis. The maximum voltage is labeled 'V'.

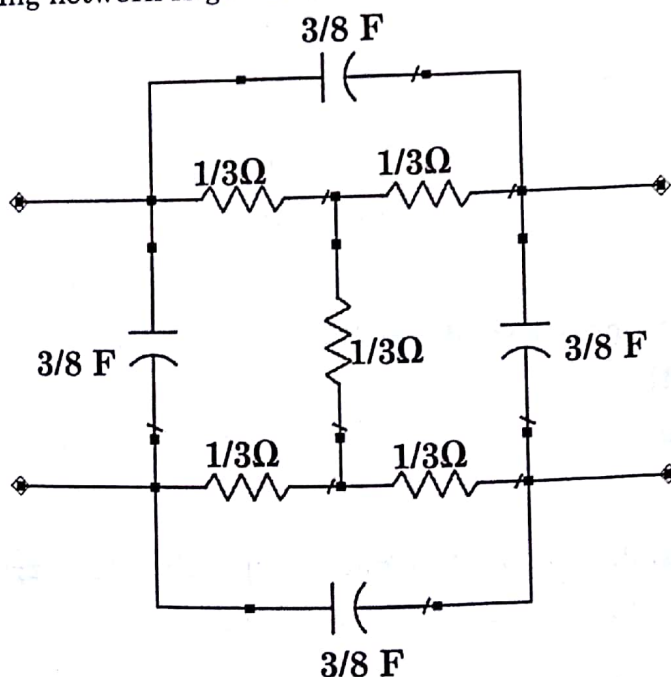
- Assume  $\sigma_{Au} = 4e7$  Siemens/meter at cavity operating temperature.

- Scanned by CamScanner


7. A steady state is achieved in following Network at  $t = 0$ , find the time when  $V_c(t)$  will be maximum



- (a)  $\ln(9)$  sec  
(b)  $\ln(9)^{0.125}$  sec  
(c)  $\ln(9)^{0.25}$  sec  
(d) 9 sec
8. Y-parameter for following network is given as



- (a)  $\begin{bmatrix} \frac{9(s+1)}{8} & \frac{-3(2s+2)}{8} \\ \frac{-3(2s+2)}{8} & \frac{9(s+1)}{8} \end{bmatrix}$   
(b)  $\begin{bmatrix} \frac{9(2s+1)}{8} & \frac{-3(2s+1)}{8} \\ \frac{-3(2s+1)}{8} & \frac{9(2s+1)}{8} \end{bmatrix}$   
(c)  $\begin{bmatrix} \frac{9(2s+1)}{8} & \frac{-3(2s+1)}{16} \\ \frac{-3(2s+1)}{16} & \frac{9(2s+1)}{8} \end{bmatrix}$   
(d)  $\begin{bmatrix} \frac{9(s+1)}{8} & \frac{-3(2s+1)}{8} \\ \frac{-3(2s+1)}{8} & \frac{9(s+1)}{8} \end{bmatrix}$

	INDIAN SPACE RESEARCH ORGANISATION	SET C
	ELECTRONICS	

9. A satellite transmits signals at a frequency of 6 GHz to a user 40000 km away. The free space path loss incurred by the signal is nearly :
- (a) 100 dB (b) 150 dB  
(c) 200 dB (d) 300 dB
10. The satellite communication link between two point is established with uplink carrier-to-noise ratio of 20 dB and downlink carrier to noise ratio of 14 dB. The overall C/N is close to :
- (a) 34 dB (b) 6 dB  
(c) 13 dB (d) 13.5 dB
11. A system generates data at a rate of 5 Mbps. In order to provide resistance to bit errors, a rate  $\frac{1}{2}$  error correcting code is applied. Further, the data is mapped to a 16-QAM constellation. What is the resulting symbol rate?
- (a) 1.25 Msps (b) 2.5 Msps  
(c) 5 Msps (d) 10 Msps
12. Consider a binary linear code with parity check matrix H given below.

$$H = \begin{bmatrix} 0 & 1 & 1 & 1 & 0 & 0 \\ 1 & 0 & 1 & 0 & 1 & 0 \\ 1 & 1 & 0 & 0 & 0 & 1 \end{bmatrix}$$


Which of the following is a valid codeword?

- (a) [1 0 0 1 0 1] (b) [1 1 1 1 0 1]  
(c) [0 1 0 0 1 0] (d) [1 1 0 1 1 0]
13. The minimum distance of a  $(n,k) = (7,4)$  linear block code is upper bounded by:
- (a) 1 (b) 2  
(c) 3 (d) 4

14. Consider a 4-PSK constellation with points  $\{\sqrt{2}, j\sqrt{2}, -\sqrt{2}, -j\sqrt{2}\}$  and a 4-PAM constellation  $\{-3, -1, 1, 3\}$ . If all the points in the constellation occur with equal probability, the ratio of average energy of 4-PAM signal to that of 4-PSK signal is:
- (a) 1 (b) 1.25  
(c) 2.5 (d) 5

April 2018



	INDIAN SPACE RESEARCH ORGANISATION	SET C
	ELECTRONICS	

15. Difference in number of complex multiplier required for 16 point DFT and 16-point radix-2 FFT is

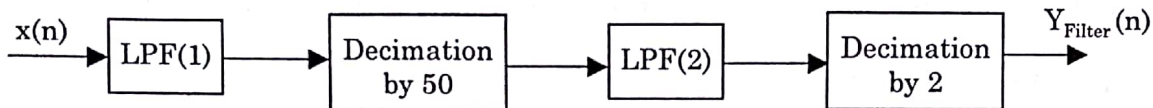
(a) 30 (b) 63 (c) 224 (d) 256

16. No of stages(S) in direct form FIR filter is given as

$$S = \text{integer} (K \cdot F_s / \Delta f)$$

Where  $F_s$  = Sampling Frequency,  $\Delta f$  = Filter transition band,  $K = 3$  (assume)

If  $x(n)$  is signal with frequency range 0-2.4 MHz and sampled at  $F_s = 400$  MHz and it is filtered by



Assumptions :

- Passband Frequency LPF(1): 1.8 MHz, Stopband Frequency LPF(1): 4 MHz
- Passband Frequency LPF(2): 1.8 MHz, Stopband Frequency LPF(2): 2 MHz
- Both filters are having flat passbands and stopbands
- Passband attenuation of both filters = 0 dB and stop band attenuation of both filters is infinity.

Calculate total no. of stages  $S_{LPF1} + S_{LPF2}$

(a) 120 (b) 545 (c) 555 (d) 665

17. Difference in dynamic range of 32-bit binary number(B) and floating point number(F) is? Standard Format for B and F as given below :

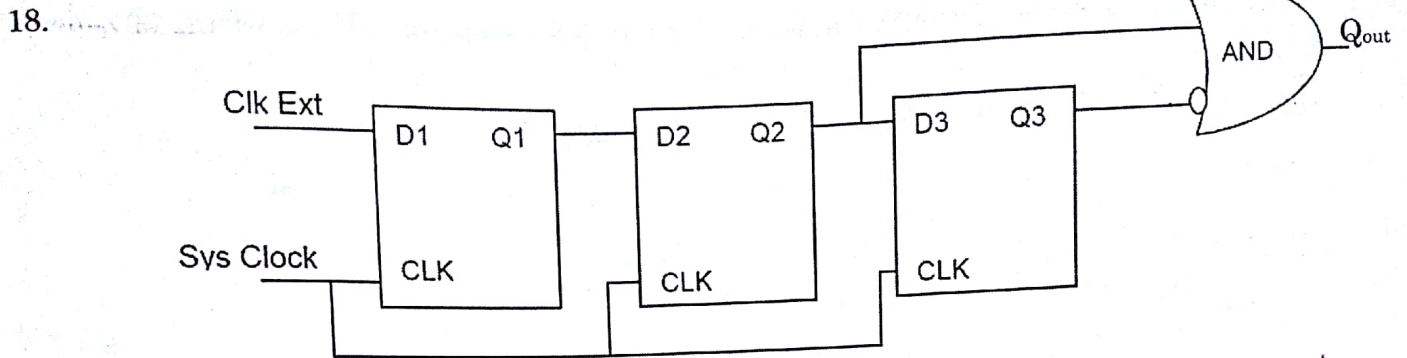

B=

Bit 31 Sign Bit	Bit 30-Bit0 Magnitude
--------------------	--------------------------

F=

Bit 31 Sign Bit	Bit 30-Bit23 Exponent	Bit 22-Bit0 fraction
--------------------	--------------------------	-------------------------

(a)  $6.02(2^7-30)$  dB (b)  $6.02(2^8-31)$  dB (c)  $6.02(2^7-31)$  dB (d)  $6.02(2^8-30)$  dB



If Sys clock frequency is  $> 4 * \text{clk\_ext}$  frequency. What is the functionality of above circuit?

- (a) Falling Edge detector with Pulse width of  $Q_{out}$  = one cycle of Sys clk
- (b) Rising Edge detector with Pulse width of  $Q_{out}$  = one cycle of Sys clk
- (c) Falling Edge detector with Pulse width of  $Q_{out}$  = one cycle of clk\_ext
- (d) Rising Edge detector with Pulse width of  $Q_{out}$  = one cycle of clk\_ext

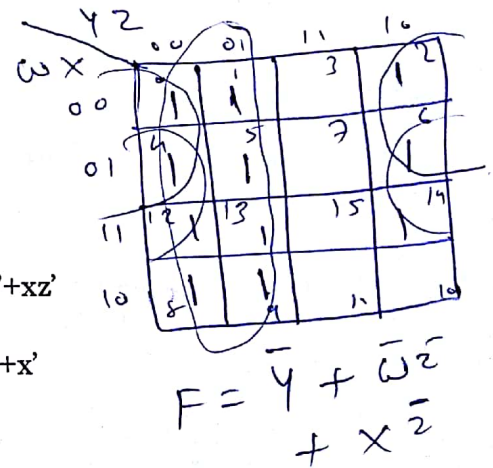
19. Simplify the Boolean expression :

$$F(w,x,y,z) = \sum(0,1,2,4,5,6,8,9,12,13,14)$$

- (a)  $w+x+y+z$
- (c)  $y + w'z' + xz$

(b)  $y' + w'z' + xz'$


(d)  $x+z'w'y+x'$



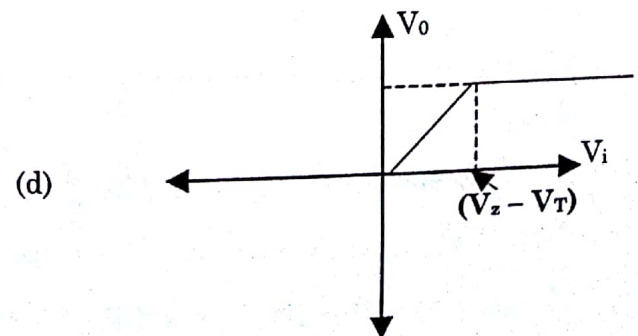
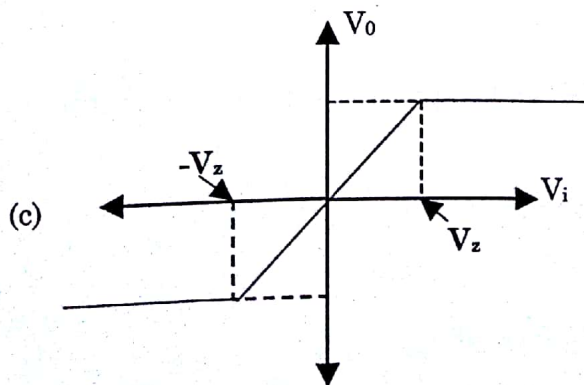
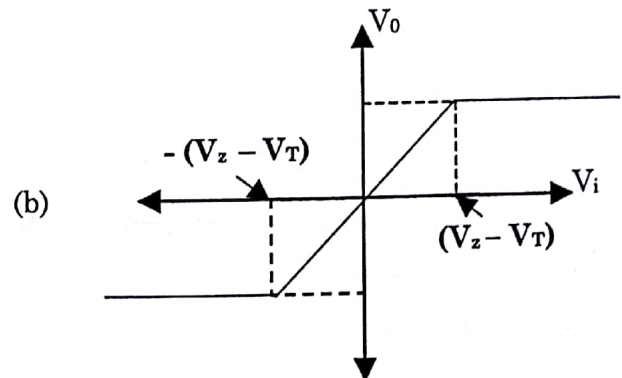
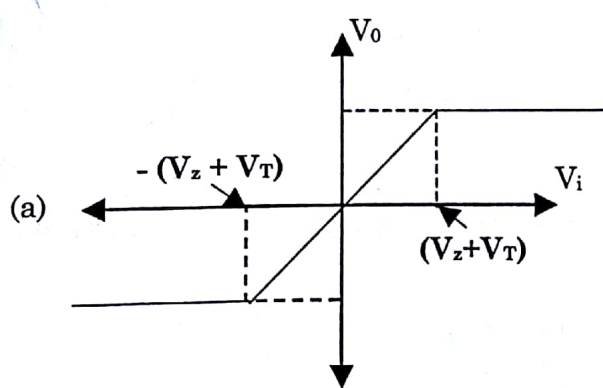
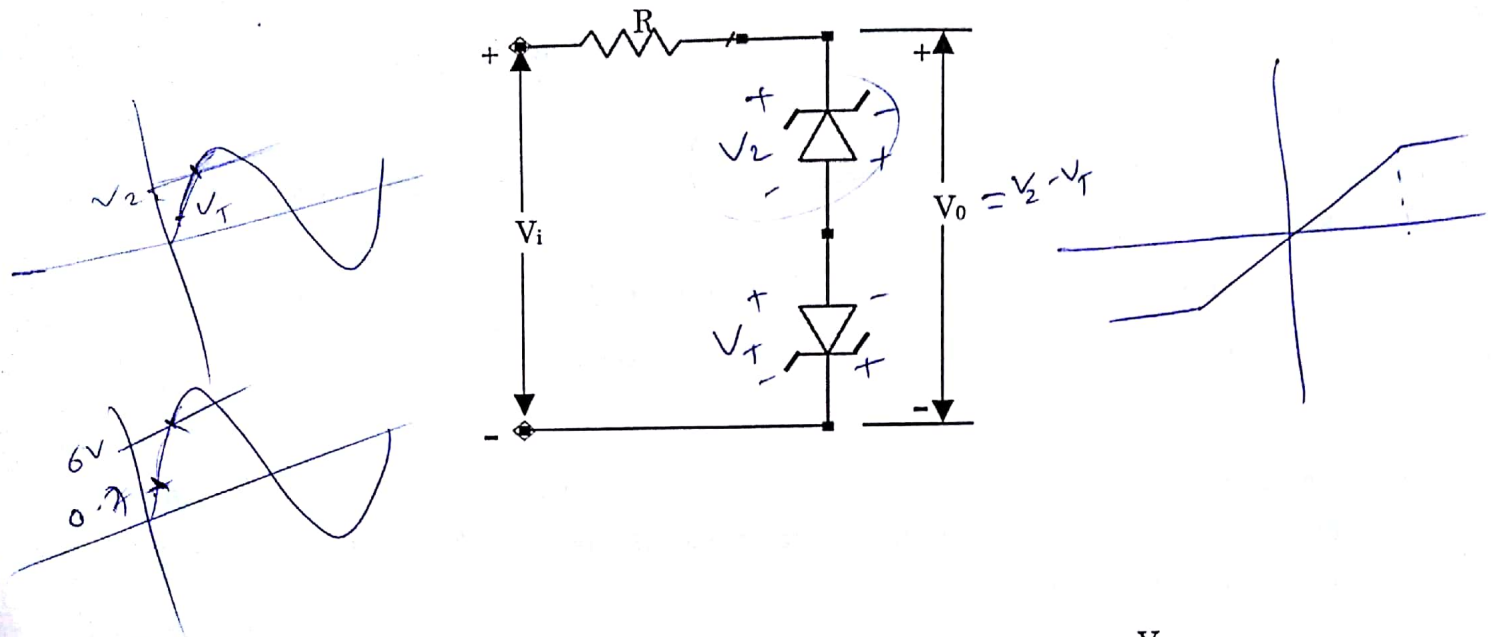
20. High State noise margin of standard TTL and 5V CMOS logic gate are

- (a) 0.4V, 0.4V
- (c) 1V, 0.4V


- (b) 0.4V, 1V
- (d) 1V, 1V

	INDIAN SPACE RESEARCH ORGANISATION	<b>SET C</b>


21. Determine the Voltage transfer characteristics of the following circuit comprising of Zener diodes having identical characteristics with Zener Breakdown voltage  $V_z$  and Diode cut-in voltage  $V_T$ .



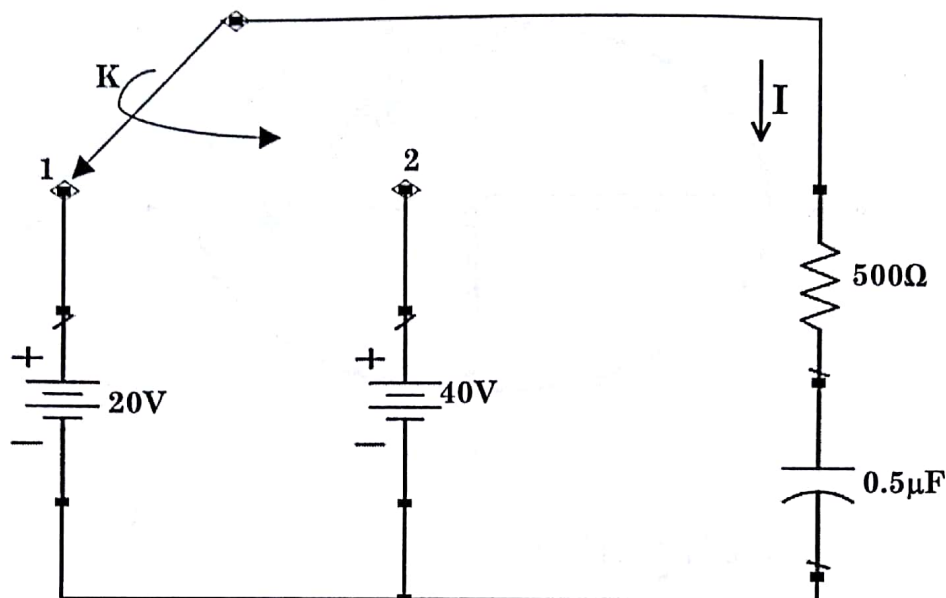


	INDIAN SPACE RESEARCH ORGANISATION	SET C
	ELECTRONICS	

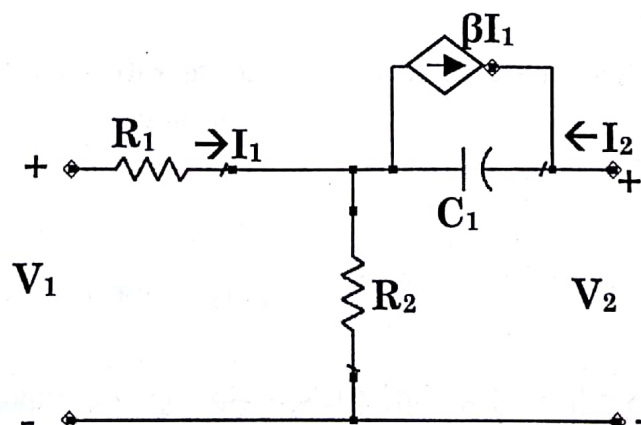
22. Two resistances of values  $2\Omega$  and  $4\Omega$  made of different materials with temperature coefficients of resistance  $3 \text{ ppm}/^\circ\text{C}$  and  $6 \text{ ppm}/^\circ\text{C}$  respectively are connected in series. What is the temperature coefficient of resistance of the net resistance?
- (a)  $5 \text{ ppm}/^\circ\text{C}$  (b)  $\sqrt{18} \text{ ppm}/^\circ\text{C}$   
(c)  $9 \text{ ppm}/^\circ\text{C}$  (d)  $4.5 \text{ ppm}/^\circ\text{C}$
23. Which of the following semiconductor compound is not used in the construction of Light Emitting Diodes?
- (a) GaAs (b) GaP  
(c) GaSe (d) GaN
24. An LC tank circuit resonates at a frequency 'f'. If the temperature coefficient of permittivity of the dielectric material used in the Capacitance is  $6 \text{ ppm}/^\circ\text{C}$ , then what is the temperature coefficient of frequency 'f'.
- (a)  $-3 \text{ ppm}/^\circ\text{C}$  (b)  $-6 \text{ ppm}/^\circ\text{C}$   
(c)  $3 \text{ ppm}/^\circ\text{C}$  (d)  $6 \text{ ppm}/^\circ\text{C}$
25. To avoid difficulties with strapping at high frequencies, the type of cavity structure used in the magnetron is,
- (a) Hole and Slot (b) Slot only  
(c) Vane (d) Rising-Sun
26. The transmit time in the repeller space of a reflex klystron must be  $(n+3/4)$  cycles to ensure that,
- (a) Electrons are accelerated by the gap voltage on their return  
(b) Returning electrons give energy to the gap oscillations  
(c) It is equal to the period of the cavity oscillations  
(d) The repeller is not damaged by striking electrons

	INDIAN SPACE RESEARCH ORGANISATION	SET C
	ELECTRONICS	

27. For a circuit given in figure, switch K is closed to position 1 at  $t = 0$ . After  $t = 1 \text{ TC}$  (Time Constant), switch is moved to position 2. Find The Current  $I$  at  $1\text{TC}(-)$  (just before one-time constant time) and  $1\text{TC}(+)$  (just after one-time constant time) respectively (assume  $1/e \approx 0.37$ )



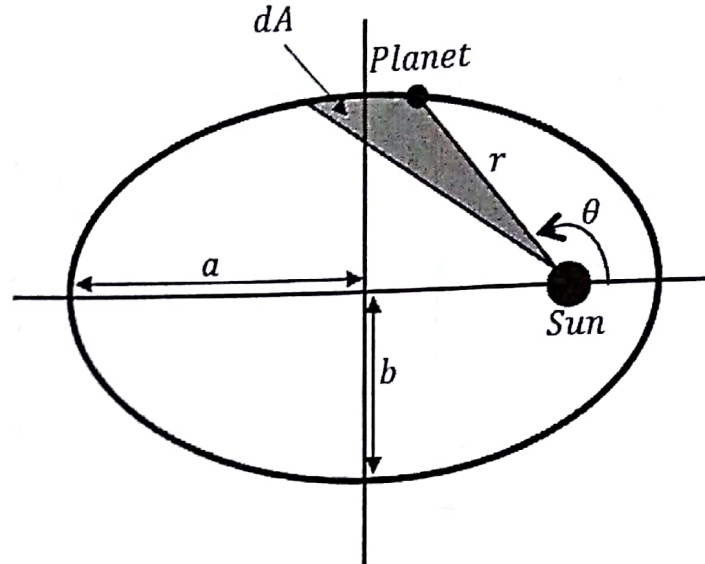
- (a) 0.0148 A and 0.055 A                      (b) 0.0148 A and -0.055 A  
(c) 0.0296 A and 0.11 A                      (d) 0.0296 A and -0.11 A
28. For a network shown in figure, which of the following statement is true.



- (a) Reciprocal and symmetric                      (b) Reciprocal but not-symmetric  
(c) Symmetric but non-reciprocal                      (d) Neither symmetric nor reciprocal




29. Pair of differential equations that describes motion of planet about sun using first two laws of Kepler is given as :

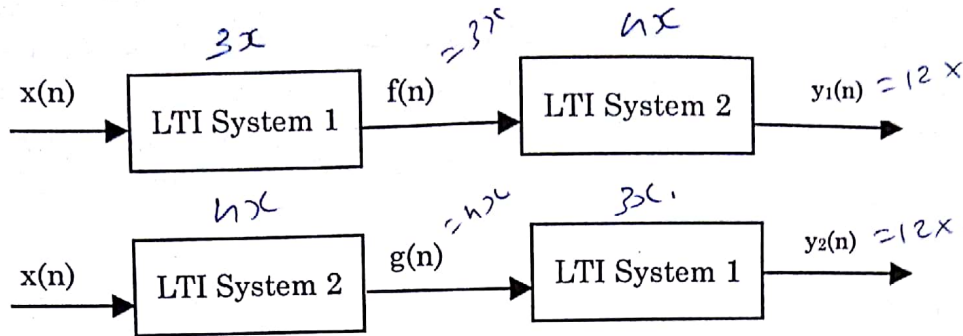


- (a)  $2\dot{r}\dot{\theta} + r\ddot{\theta} = 0$  and  $\ddot{r} + r\dot{\theta}^2\left(r\frac{a}{b^2} - 1\right) = 0$
- (b)  $2\dot{r}\dot{\theta} + r\ddot{\theta} = 0$  and  $\ddot{r} + r\dot{\theta}^2\left(r\frac{a}{b^2} + 1\right) = 0$
- (c)  $2\dot{r}\dot{\theta} - r\ddot{\theta} = 0$  and  $\ddot{r} - r\dot{\theta}^2\left(r\frac{a}{b^2} - 1\right) = 0$
- (d)  $2\dot{r}\dot{\theta} - r\ddot{\theta} = 0$  and  $\ddot{r} - r\dot{\theta}^2\left(r\frac{a}{b^2} + 1\right) = 0$
30. Two communication antennas A and B, one operating at 300 MHz and other at 3 GHz respectively and having same gain, are illuminated with identical flux density of  $-100$  dBW/m<sup>2</sup>. What is the relation between the received powers ( $P_A : P_B$ )?
- (a) 1:10 (b) 10:1
- (c) 1:100 (d) 100:1
31. Consider identical four, 3-faced dice. When the dice are rolled, the faces of the dice appear with probabilities given below. Which distribution has the maximum entropy?
- (a)  $(1/2, 1/4, 1/4)$  (b)  $(1/3, 1/3, 1/3)$
- (c)  $(1/6, 2/3, 1/6)$  (d)  $(1/4, 1/6, 7/12)$

$$H = -\sum p_i \ln(p_i)$$

	INDIAN SPACE RESEARCH ORGANISATION	SET C
	ELECTRONICS	

32.



If System 1 and 2 are Linear Time Invariant systems and same input  $x(n)$  is provided both configuration

Statement 1:  $y_1(n) = y_2(n)$

Statement 2:  $f(n) = g(n)$

- (a) Statement 1 is always true  
 (b) Statement 2 is always true  
 (c) Both Statement 1 and Statement 2 are always true  
 (d) Both Statement 1 and statement 2 are not true

$$x(n) = \sin\left(2\pi \cdot 4000 \cdot \frac{n}{16000}\right) + 0.75 \sin\left(2\pi \cdot 5000 \cdot \frac{n}{16000} + \frac{\pi}{4}\right)$$

$$x(n) = \sin\left(\frac{8\pi n}{16}\right) + 0.75 \sin\left(\frac{10\pi n}{16} + \frac{\pi}{4}\right)$$

$$X(m) = \sum_{n=0}^{N-1} x(n) \cdot e^{-j2\pi mn/N}$$

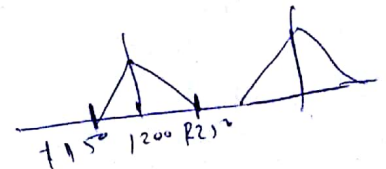
33. Benefit(s) of Bandpass sampling over low pass sampling

- (a) It reduces speed requirement of A/D convertor  
 (b) Increase the amount of digital memory necessary to capture a given interval of signal  
 (c) Both (a) and (b) are correct  
 (d) Both (a) and (b) are incorrect

$$f_s = 2f_m = 2 \cdot 4000 \text{ MHz}$$

34. For a signal with  $F_c$  (Centre Frequency) = 1200 MHz and BW = 100 MHz which of the following Sampling frequency ( $F_s$ ) will cause spectrum inversion:

- (a) 287.5 MHz  
 (b) 575 MHz  
 (c) 1150 MHz  
 (d) 1600 MHz



35. If  $x_{in}(t) = \sin(2\pi \cdot 4000 \cdot t) + 0.75 \cdot \sin(2\pi \cdot 5000 \cdot t + \pi/4)$  is sampled with  $F_s = 16000 \text{ Hz}$

calculate  $X(0)$  if  $X(m) = \sum_{n=0}^{N-1} x(n) e^{-j2\pi mn/N}$  When  $N = 8$ , where  $x(n) = x_{in}(nt_s)$

- (a)  $0.0 - j 4.0$   
 (b)  $0.0 - j 0.0$   
 (c)  $1.414 + j 1.414$   
 (d)  $0.0 + j 4.0$



	INDIAN SPACE RESEARCH ORGANISATION	<b>SET C</b>
	ELECTRONICS	

36. VHDL

```

entity test is
port
(
data : in std_logic;
clk  : in std_logic;
reset : in std_logic;
q    : out std_logic
);
end test;
architecture behav of test is
begin
process (clk)
begin
    if (clk'event and clk = '1') then
        if (reset = '0') then
            q <= '0';
        else
            q <= data;
        end if;
    end if;
end process;
end behav;

```

VERILOG

```


module test (data, clk, reset, q);
input data, clk, reset;
output q;
reg q;

always @ (posedge clk)
if (~reset)
q = 1'b0;
else q = data;
endmodule

```

The Above Verilog/ VHDL module depicts which sequential element:

- (a) Rising edge Flip-flop with synchronous Reset
- (b) Falling edge Flip-Flop with synchronous Reset
- (c) Rising edge Flip-flop with asynchronous Reset
- (d) Falling edge Flip-Flop with asynchronous Reset



# INDIAN SPACE RESEARCH ORGANISATION

## ELECTRONICS

### SET C

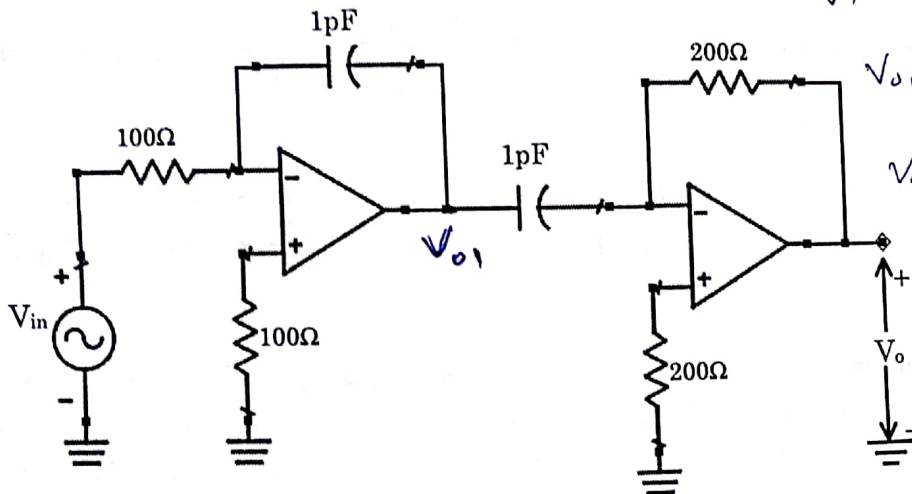
37. An ideal p-n junction diode in series with a  $100\ \Omega$  resistance is forward biased such that the forward current flowing through the diode is  $100\text{ mA}$ . If voltage across this circuit is instantaneously reversed to  $20\text{ V}$  at time instant  $t = t_0$ , then the reverse current flowing through the diode at time instant  $t = t_0$  is approximately given by

- (a)  $0\text{ mA}$  (b)  $200\text{ mA}$   
(c)  $100\text{ mA}$  (d)  $2\text{ mA}$

$$I_0 = 100\text{ mA}$$

$$100\text{ mA} = I_0 (e^{\frac{V_0}{V_T}} - 1)$$

38. Determine output voltage ' $V_0$ ' for below circuit where  $V_{in} = \sin(100\pi t)$



$$\frac{V_{01}}{V_{in}} = -\frac{1}{sC R_1}$$

$$V_{01} = -\frac{1}{sC R_1} \cdot V_{in}$$

$$V_0 = -sC R_2 \cdot V_{01}$$

$$V_0 = \frac{R_2}{R_1} \cdot V_{in}$$

$$V_0 = \frac{200}{100} \cdot \sin$$

$$b = a \sqrt{1 - \frac{V_{in}}{V_P}}$$

$$b = a \sqrt{1 - \frac{1}{4}}$$

$$b = \frac{a\sqrt{3}}{2} = \frac{1.5 \times \sqrt{3}}{2}$$


- (a)  $2 \sin(100\pi t)$  (b)  $\sin(100\pi t)$   
(c)  $\sin(200\pi t)$  (d)  $0.5 \sin(100\pi t)$
39. Determine the channel half-width for an n-channel silicon FET having Gate-to-Source voltage,  $V_{GS} = V_P/4$ , where  $V_P$  is the Pinch-off voltage and drain current,  $I_d = 0$ . (Consider Donor Concentration  $N_D = 10^{15}$  electrons/cm<sup>3</sup>) (b) Channel half-width for  $V_{GS} = 0\text{ V}$  is  $3\mu\text{m}$ ).
- (a)  $2.25\ \mu\text{m}$  (b)  $3\ \mu\text{m}$   
(c)  $1.5\ \mu\text{m}$  (d)  $0.75\ \mu\text{m}$

BE001

15

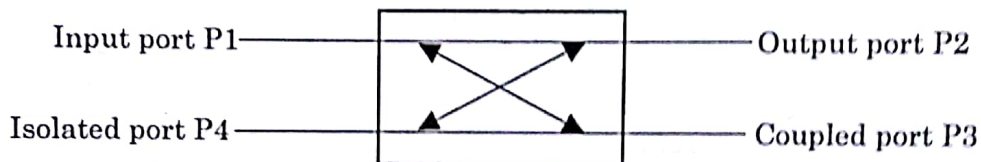
April 2018




	INDIAN SPACE RESEARCH ORGANISATION	SET C
	ELECTRONICS	

40. Design a single section, quarter wave impedance transformer at 5 GHz from  $3.75 \text{ cm} \times 2 \text{ cm}$  guide to  $3.75 \text{ cm} \times 1 \text{ cm}$  guide. Assume air filled wave guide with transformer section having same width as that of the input and output sections.
- (a) Height = 1.414 cm, Length = 3 cm      (b) Height = 1.5 cm, Length = 2.5 cm  
(c) Height = 1.414 cm, Length = 2.5 cm      (d) Height = 1.5 cm, Length = 3 cm

41. A four port directional coupler has 4:1 power splitting ratio and has dissipation loss of 3dB. The coupler directivity is 40dB. What fraction of input power  $P_1$  will go to ports  $P_2$  and  $P_3$ ?

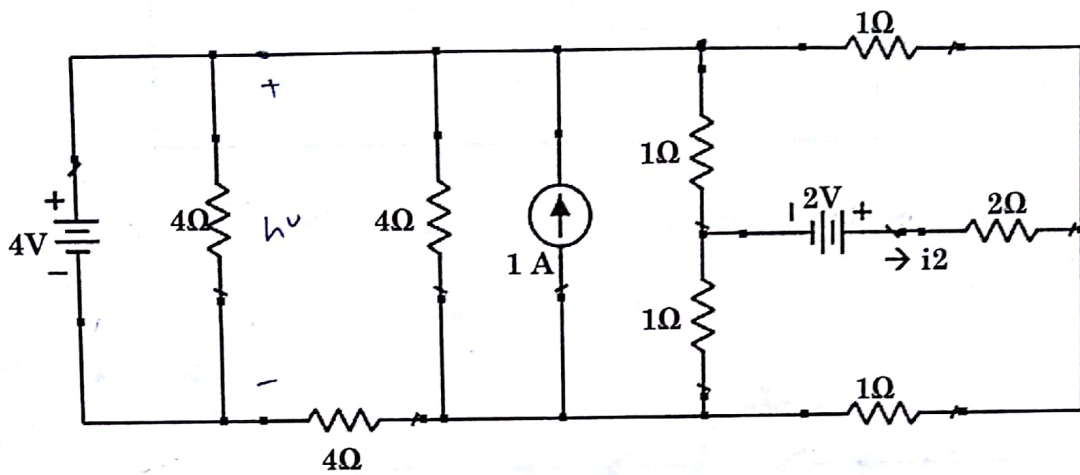


- (a)  $P_2 = 0.4 \times P_1$ ,  $P_3 = 0.1 \times P_1$       (b)  $P_2 = 0.8 \times P_1$ ,  $P_3 = 0.2 \times P_1$   
(c)  $P_2 = 0.6 \times P_1$ ,  $P_3 = 0.15 \times P_1$       (d)  $P_2 = 0.1 \times P_1$ ,  $P_3 = 0.4 \times P_1$
42. A cell phone transmits at a power level of 800 mW with an antenna gain of 3.0 dB. The cell tower has an antenna gain of 10.0 dB and is at a distance of 5 km away. Transmission frequency is 600 MHz. Noise level at Receiver Input is -95 dBm and required Signal to Noise ratio to close the link is 5 dB. Find the link margin in dB. (assume  $\pi^2=10$ )
- (a) 150 dB      (b) 60 dB  
(c) 30 dB      (d) 35 dB
43. What is the value of magnetic flux in Weber, if it is 2000 in Maxwell?
- (a)  $2 \times 10^{-5}$       (b)  $2 \times 10^{-3}$   
(c)  $2 \times 10^5$       (d)  $2 \times 10^3$
44. How resistance of Eureka varies with temperature?
- (a) Decreases      (b) Linearly Increases  
(c) Remains Constant      (d) Exponentially increases

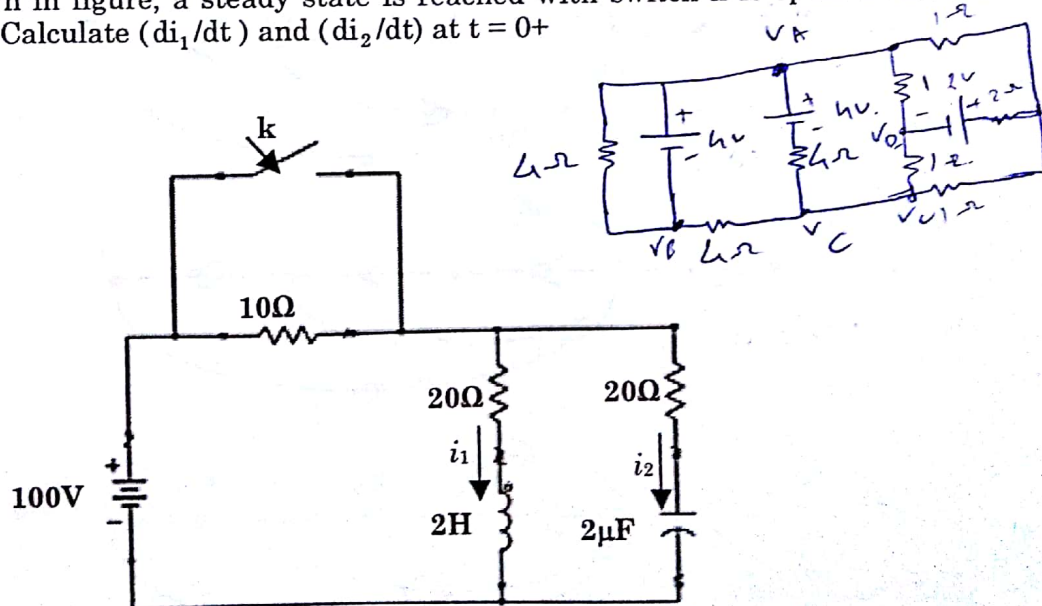
	INDIAN SPACE RESEARCH ORGANISATION	SET C
	ELECTRONICS	

45. A resistor  $R_1 = 4 \text{ k}\Omega$  is connected across the secondary of transformer for which  $L_1 = 0.2 \text{ H}$ ,  $L_2 = 10 \text{ H}$  and flux coupling coefficient  $k = 0.5$ . Find the peak voltage across resistor  $R_1$  when  $250 \text{ V}$  peak voltage at  $400 \text{ rad/sec}$  is applied to primary winding of transformer.
- (a)  $353.55 \text{ V}$  (b)  $500 \text{ V}$   
(c)  $707 \text{ V}$  (d)  $1000 \text{ V}$

46. For a network shown in figure, Calculate current  $i_2$ .



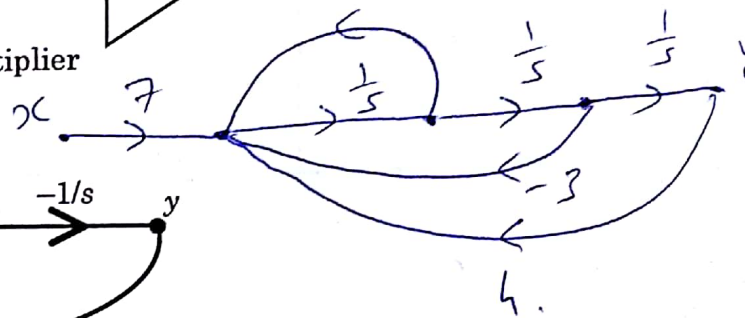
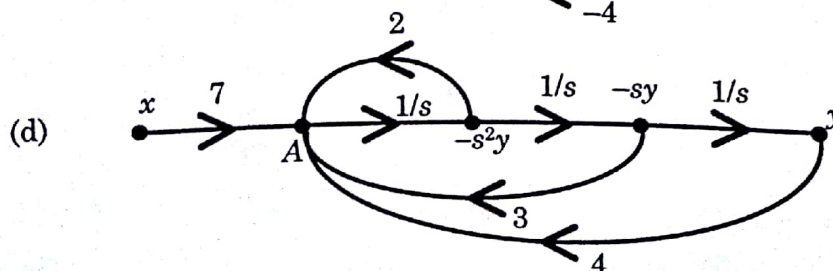
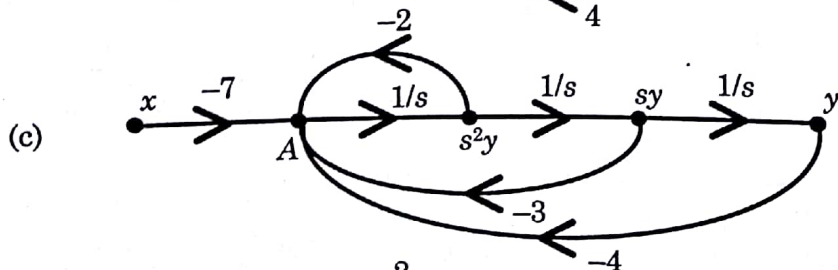
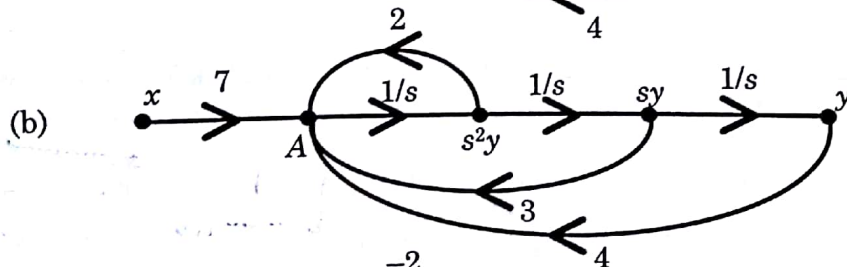
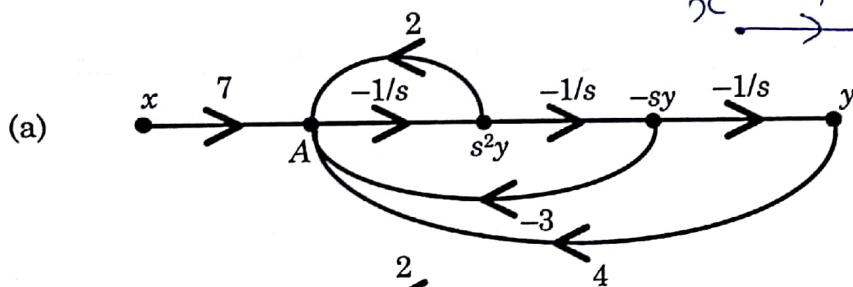
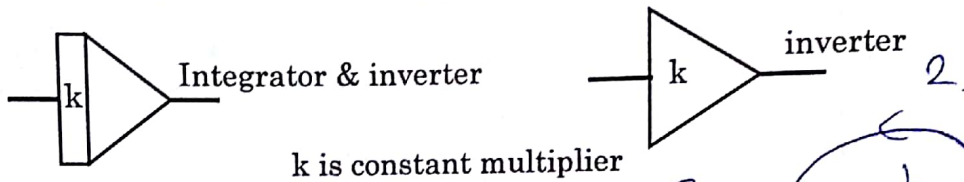
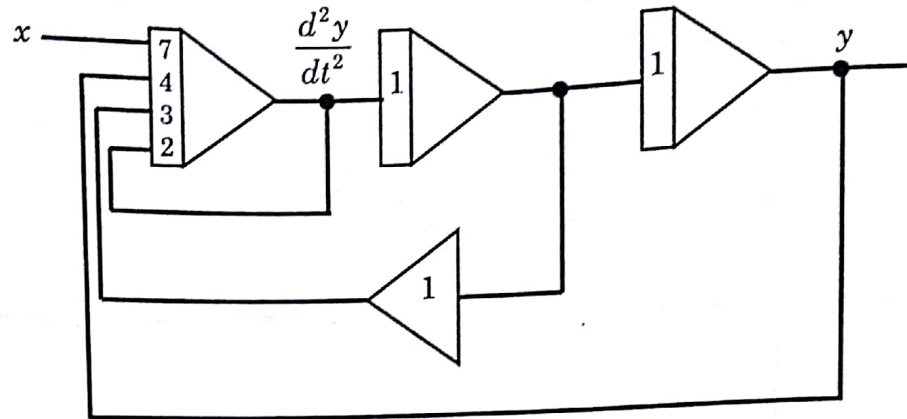
- (a)  $2/3 \text{ A}$  (b)  $3/2 \text{ A}$   
(c)  $1/3 \text{ A}$  (d) None of the above
47. For a network shown in figure, a steady state is reached with switch  $k$  is open. Switch is closed at time  $t = 0$ . Calculate  $(di_1/dt)$  and  $(di_2/dt)$  at  $t = 0^+$




- (a)  $16.67 \text{ A/sec}$  and  $-4.16 \times 10^4 \text{ A/sec}$  (b)  $16.67 \text{ A/sec}$  and  $-3.33 \times 10^4 \text{ A/sec}$   
(c)  $25 \text{ A/sec}$  and  $-4.16 \times 10^4 \text{ A/sec}$  (d)  $25 \text{ A/sec}$  and  $-3.33 \times 10^4 \text{ A/sec}$

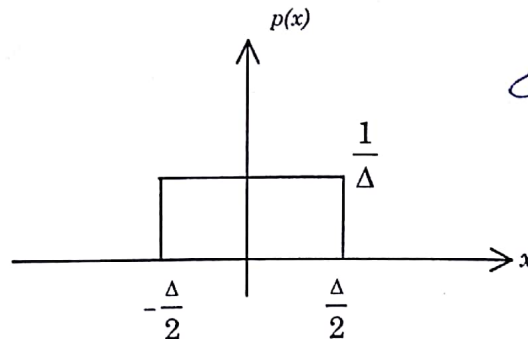


48. Signal flow diagram of following analog computer circuit is



	INDIAN SPACE RESEARCH ORGANISATION	SET C
	ELECTRONICS	

49. Find the variance of the distribution shown in the figure.



$$\sigma^2 = \int_{-\frac{\Delta}{2}}^{\frac{\Delta}{2}} x^2 \cdot \frac{1}{\Delta} dx = \frac{1}{\Delta} \left[ \frac{x^3}{3} \right]_{-\frac{\Delta}{2}}^{\frac{\Delta}{2}} = \frac{1}{\Delta} \left( \frac{\Delta^3}{24} - \left(-\frac{\Delta^3}{24}\right) \right) = \frac{1}{\Delta} \cdot \frac{\Delta^3}{12} = \frac{\Delta^2}{12}$$

- (a)  $\frac{\Delta^2}{2}$  (b)  $\frac{\Delta^2}{4}$   
(c)  $\frac{\Delta^2}{8}$  (d)  $\frac{\Delta^2}{12}$

50. Fourier transform of  $te^{-at}u(t)$ , (where,  $a > 0$ ,  $u(t)$  is the Unit step function) is:

- (a)  $\frac{a}{(a + j2\pi f)^2}$  (b)  $\frac{1}{(a + j2\pi f)^2}$   
(c)  $\frac{a}{(a + j2\pi f)}$  (d)  $\frac{1}{(a + j2\pi f)}$

$$\frac{1}{a + j\omega} \cdot \frac{-j}{(a + j\omega)^2} = \frac{j}{(a + j\omega)^2}$$

51. Consider waveforms  $\cos(2\pi f_1 t + \theta)$  and  $\cos(2\pi f_2 t)$ , ( $f_1 > f_2$ ), to be used for non-coherent binary FSK signalling. If the symbol duration is  $T$  seconds, and  $\theta$  is constant arbitrary angle from 0 to  $2\pi$ , what is the minimum separation required between  $f_1$  and  $f_2$  for non-coherent, orthogonal FSK?

- (a)  $f_1 - f_2 = \frac{1}{T}$  (b)  $f_1 - f_2 = \frac{2}{T}$   
(c)  $f_1 - f_2 = \frac{1}{4T}$  (d)  $f_1 - f_2 = \frac{1}{3T}$


$$\frac{2A}{1 - 0.2e^{-j\omega}} + \frac{-1B}{1 - 0.1e^{-j\omega}}$$

52. Let  $X(e^{j\omega}) = \sum_{n=-\infty}^{\infty} x[n]e^{-j\omega n}$  and  $x[n] = \frac{1}{2\pi} \int_{-\pi}^{\pi} X(e^{j\omega})e^{j\omega n}d\omega$ . If  $X(e^{j\omega}) = \frac{1}{(1 - 0.2e^{-j\omega})(1 - 0.1e^{-j\omega})}$ ,

what is  $x[n]$  in terms of unit discrete step function  $u(n)$ ?

- (a)  $2(0.2)^n u(n) - (0.1)^n u(n)$  (b)  $2(0.1)^n u(n) - (0.2)^n u(n)$   
(c)  $(0.2)^n u(n) - (0.1)^n u(n)$  (d)  $(0.1)^n u(n) - (0.2)^n u(n)$

$$\frac{2}{1 - 0.2e^{-j\omega}} - \frac{1}{1 - 0.1e^{-j\omega}}$$

	INDIAN SPACE RESEARCH ORGANISATION	SET C
	ELECTRONICS	

53. What is the content of Accumulator in binary after execution of following 8051 Assembly code :
- ```


MOV A, #27H
MOV R1, A
SWAP A
ANL A, # 0FH
MOV B, #10
MUL AB
MOV R2, A
MOV A, R1
ANL A, #0FH
ADD A, R2

```
- (a) 00100111      (b) 01110010      (c) 01010101      (d) 11001011
54. In a 16-Bit micro-controller if a two-dimensional integer array A[5][7] is stored at base location 0x8000, What is the address of A[4][2]?
- (a) 0x800C      (b) 0x803E      (c) 0x801F      (d) 0x8400
55. Content of variable flag after following 'C' code execution:
- ```

Unsigned char flag = 0x7C;
flag=flag | 0x80;
flag=flag | (1<<4);
flag&=~(1<<7);
flag^=(1<<6);

```
- (a) 0x1C      (b) 0x20      (c) 0x24      (d) 0x3C
56. Process P1, P2 and P3 with execution time of 6 ms, 4 ms and 2 ms respectively enter in ready state together in order P1, P2, P3. Calculate the waiting and turnaround time of Process P1. Assuming no wait time due to I/O and round robin scheduling with time slot of 2 ms.
- (a) 6 ms, 12 ms      (b) 6 ms, 10 ms      (c) 4 ms, 4 ms      (d) 4 ms, 6 ms
57. A. HDL Coding /RTL Design  
B. Synthesis  
C. Static Timing Analysis  
D. Place and Route  
E. Programming file generation
- What is the correct order of FPGA design flow?
- (a) A,B,C,D,E      (b) A,B,D,C,E      (c) B,D,C,E,A      (d) C,A,D,E,B



	INDIAN SPACE RESEARCH ORGANISATION	SET C
	ELECTRONICS	

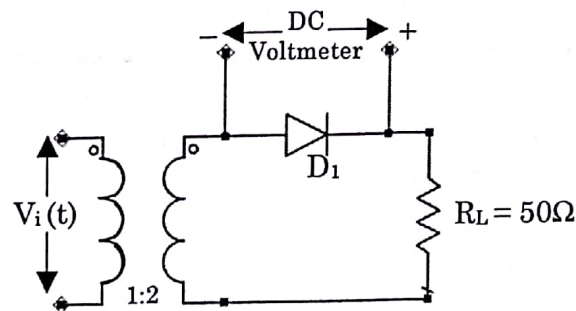
58. Electric Field of 1 V/m is applied to a Boron doped Silicon semiconductor slab having doping density of  $10^{16}$  atoms/cm<sup>3</sup> at 300K temperature. Determine the approximate resistivity of the slab. (Consider intrinsic carrier concentration of Silicon at 300 K =  $1.5 \times 10^{10}$  / cm<sup>3</sup> Hole Mobility = 500 cm<sup>2</sup>/Vs at 300 K; Electron Mobility = 1300 cm<sup>2</sup>/Vs at 300 K).

- (a) 0.48  $\Omega$ -cm (b) 0.35  $\Omega$ -cm  
(c) 0.16  $\Omega$ -cm (d) 1.25  $\Omega$ -cm

$$E = \frac{V}{L}$$

$$\rho = \frac{1}{nq\mu_n}$$

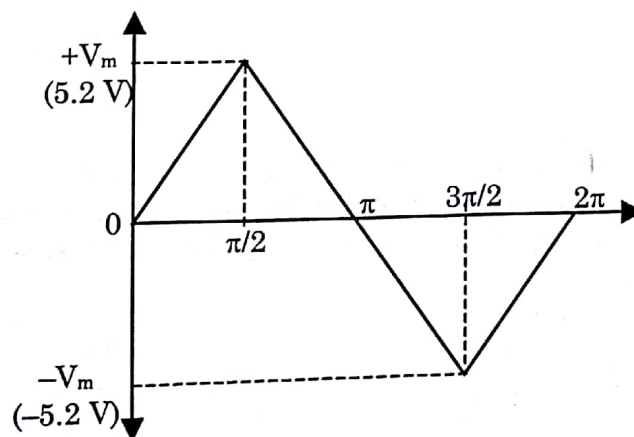
59. What will be the voltage reading of DC Voltmeter placed across the terminals of the Diode in the circuit below,



$$V_d = \mu E$$

$$\rho = \frac{1}{nq\mu_n}$$

having the following periodical input signal ' $V_i(t)$ '



(Assume cut-in voltage of the Diode = 0 V; Forward resistance of the Diode = 2  $\Omega$ )

- (a) 1.25 V (b) 2.5 V  
(c) 0 V (d) 0.1 V

$$= \frac{1}{1.6 \times 10^{16} \times 10^{16} \times 500}$$


$$= \frac{1}{800000000000000000}$$

$$= \frac{1}{8 \times 10^{17}}$$

$$= \frac{1}{8} \times 10^{-17}$$


$$= 0.125 \times 10^{-17}$$

$$= 1.25 \times 10^{-18}$$

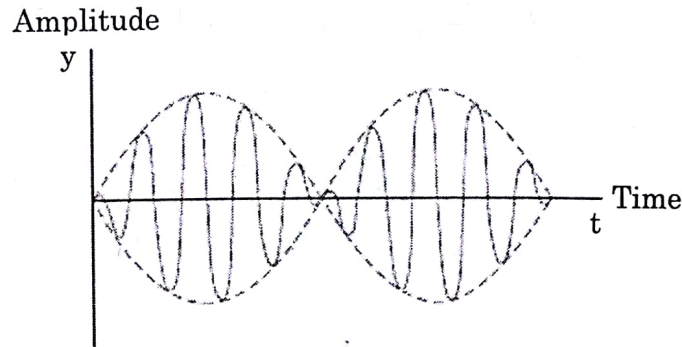
	INDIAN SPACE RESEARCH ORGANISATION	SET C
	ELECTRONICS	

60. A monostatic pulsed radar operating at 30GHz has a transmitter with 2KW O/P power and an antenna with 30dB gain. Minimum detectable signal in the receiver is  $-100\text{dBm}$ . Determine the maximum range of the radar, if it is required to detect a target having radar cross section of  $10\text{sq.m}$  (consider  $\log_{10} 4\pi = 1.1$ ). Assume EM wave propagate under ideal conditions.
- (a) 10 km (b) 21.5 km  
(c) 56 km (d) 100 km
61. Which of the following statement is not true about delay line cancellers?
- (a) It eliminates DC components of fixed targets and passes AC components of moving targets  
(b) It is used in moving target indicator radar  
(c) Time delay in one channel of the delay line canceller is one half of the pulse repetition period  
(d) It rejects any moving target whose Doppler frequency happens to be the same as the PRF or a multiple thereof
62. An air filled rectangular waveguide with dimensions  $a = 75\text{ mm}$ ,  $b = 37.5\text{ mm}$  has same guide wavelength at frequencies  $f_1$  and  $f_2$  when operated at  $\text{TE}_{10}$  and  $\text{TE}_{20}$  modes respectively. If the frequency  $f_1$  is  $\sqrt{13}\text{ GHz}$ , what is frequency  $f_2$  in GHz?
- (a) 10 (b) 5  
(c)  $\sqrt{13}/2$  (d)  $2\sqrt{13}$
63. A waveguide of dimensions  $a = 15\text{ mm}$  and  $b = 7.5\text{ mm}$  is used as a high-pass filter. If the stop band attenuation required at 8 GHz is  $\sim 109.2\text{ dB}$ , what is the length of the filter? (assume conductor losses to be zero, approximate  $\pi = 3.14$  and  $1\text{ Np} \sim 8.69\text{ dB}$ ) ( $\log_{10} e = 0.4343$ )
- (a) 100 mm (b) 869 mm  
(c) 86.9 mm (d) 54.6 mm
64. An RF signal is applied to a  $50\Omega$  lossless transmission line which is terminated in a load with impedance,  $Z_L = j50$ . The wavelength is 8 cm. Find the position of voltage and current maximum respectively nearest to the load measured from load end?
- (a) 1 cm, 3 cm (b) 3 cm, 1 cm  
(c) 3 cm, 5 cm (d) 5 cm, 3 cm



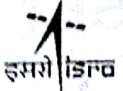
	INDIAN SPACE RESEARCH ORGANISATION	SET C
	ELECTRONICS	

65. Which of the following Oscillation types this waveform represents when the difference between input frequency and natural frequency is small? Assume the generating system to be a lossless mechanical system.

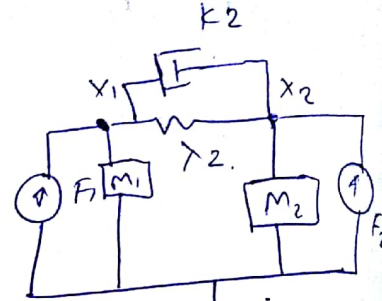
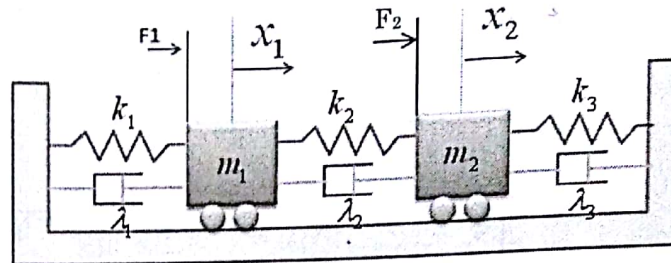


- (a) Damped Forced Oscillation      (b) Undamped Forced Vibration  
(c) Damped Vibration      (d) None of the above
66. Identify the correct sequence of stages in charging of a Lead-Acid battery.  
(a) Constant Current, Topping, Float      (b) Topping, Constant Current, Float  
(c) Float, Topping, Constant Current      (d) Float, Constant Current, Topping
67. A rocket with lift-off mass of  $m_0$  is launched from ground level. During flight, fuel burns at a constant rate for  $\tau$  seconds and exhaust gases are ejecting from the bottom of the rocket at  $\beta$  Kg/sec with speed of  $c$  m/s relative to the rocket. Ignoring air resistance and assume acceleration due to gravity,  $g$  as constant, which of the following expression represents velocity of rocket  $v(t)$ .  
(a)  $-c \ln \left[ \frac{m_0 - \beta t}{m_0} \right] - gt$       (b)  $-c \ln \left[ \frac{m_0 - \beta t}{m_0} \right] + gt$   
(c)  $-c \ln \left[ \frac{m_0}{m_0 - \beta t} \right] + gt$       (d)  $-c \ln \left[ \frac{\beta}{m_0 - \beta t} \right] - gt$
68. For a conservative vector field  $F$  below, which of the following is the scalar potential?  
 $F = (y^2 \cos x + az^3) \vec{i} + (2y \sin x - 4) \vec{j} + (3xz^2 + 2) \vec{k}$   
 $a$  is an integer  
(a) Cannot be found      (b)  $xz^3 + y^2 \sin x - 4y + 2z$   
(c)  $2y \cos x - y^2 \sin x - 2y + 4z$       (d)  $2y \sin x - z^2 \cos x - 2y + 4z$
69. A cylindrical waveguide with radius of 3.5 cm has waves travelling in  $TM_{12}$  mode. The value of 1<sup>st</sup> zero of 2<sup>nd</sup> order Bessel function is 7. Find the cut-off wavelength for this mode.  
(a)  $\pi$  cm      (b)  $1.5 \pi$  cm  
(c)  $2 \pi$  cm      (d)  $\pi/2$  cm



	INDIAN SPACE RESEARCH ORGANISATION	SET C
	ELECTRONICS	

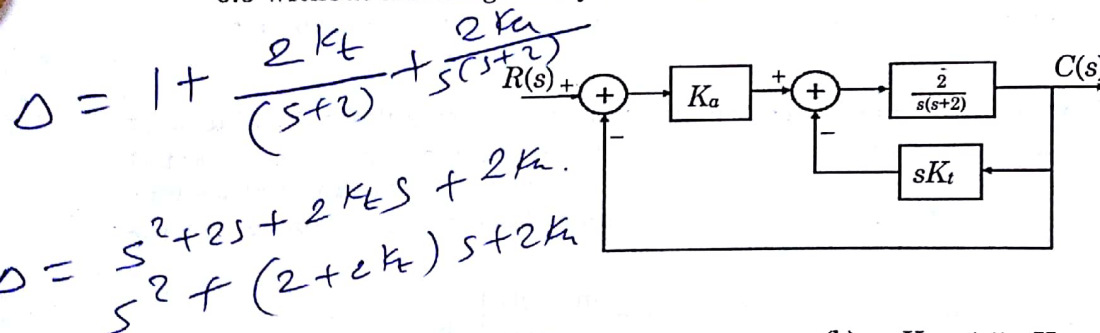
70. Consider a mechanical system shown in figure. Masses are free to slide over frictionless horizontal surface. The equation of motion of mass  $m_1$  is



- (a)  $m_1 \ddot{x}_1 + (\lambda_1 + \lambda_2) \dot{x}_1 + \lambda_2 \dot{x}_2 - (k_1 + k_2)x_1 - k_2 x_2 = F_1$   
 (b)  $m_2 \ddot{x}_1 + (\lambda_1 - \lambda_2) \dot{x}_1 + \lambda_2 \dot{x}_2 - (k_1 - k_2)x_1 - k_2 x_2 = F_1$   
 (c)  $m_1 \ddot{x}_1 + (\lambda_1 + \lambda_2) \dot{x}_1 - \lambda_2 \dot{x}_2 + (k_1 + k_2)x_1 - k_2 x_2 = F_1$   
 (d)  $m_1 \ddot{x}_1 + (\lambda_1 - \lambda_2) \dot{x}_1 + \lambda_2 \dot{x}_2 - (k_1 - k_2)x_1 - k_2 x_2 = F_2$

$$F_1 = m_1 \ddot{x}_1 + \lambda_1 \dot{x}_1 + \lambda_2 \dot{x}_1 + k_2(x_1 - x_2) + \lambda_2(x_1 - x_2)$$

71. For a feedback system shown below, If  $K_t = 0$  and  $K_a = 5$ , then steady state error for unit ramp input is 0.2. What will be the new value of  $K_t$  and  $K_a$  if damping ratio is increased to 0.5 without affecting steady state error:



$$K_a \left( \frac{2}{s(s+2)} \right)$$

$$G(s) = K_a \left( \frac{2}{s^2 + 2s + 2K_t s} \right)$$

- (a)  $K_t = 1.5, K_a = 1.25$   
 (c)  $K_t = 15, K_a = 12.5$

- (b)  $K_t = 1.5, K_a = 12.5$   
 (d)  $K_t = 15, K_a = 1.25$

$$0.2 = \frac{1}{2K_a}$$

72. For a negative unity feedback system, Gain is given by  
 $G(s) = 0.25 / ((s^2 + 1)(8s + 3))$

Transfer function of a lead compensator aimed at achieving gain crossover frequency of 0.5 rad/sec and phase margin of 30 deg is


- (a)  $5 \left[ \frac{\sqrt{3}s + 0.5}{s + 0.5\sqrt{3}} \right]$   
 (b)  $5 \left[ \frac{\sqrt{3}s - 0.5}{s - 0.5\sqrt{3}} \right]$   
 (c)  $\left[ \frac{\sqrt{3}s + 0.5}{s + 0.5\sqrt{3}} \right]$   
 (d)  $\left[ \frac{0.5s + \sqrt{3}}{s + 0.5\sqrt{3}} \right]$

$$25\omega_n = 2 + 2K_t$$

$$\omega_n^2 = 2K_t$$

73. A sensitivity of transfer function  $T = (A_1 + kA_2) / (A_3 + kA_4)$  with respect to parameter  $k$  is given by

- (a)  $k(A_2A_3 - A_1A_4) / ((A_3 + kA_4)(A_1 + kA_2))$   
 (b)  $(A_2A_3 - A_1A_4) / ((A_3 + kA_4)^2)$   
 (c)  $k(A_2A_3 - A_1A_4) / ((A_3 + kA_4)^2)$   
 (d)  $(A_2A_3 - A_1A_4) / ((A_3 + kA_4)(A_1 + kA_2))$

	INDIAN SPACE RESEARCH ORGANISATION	SET C
	ELECTRONICS	

74. If over the course of a day, the maximum electron density in the ionosphere varies from  $10^{11}$  to  $10^{12} \text{ m}^{-3}$ ; the critical frequency changes approximately from:
- (a) 2.2 MHz to 7 MHz (b) 2.5 MHz to 8 MHz
- (c) 2.8 MHz to 9 MHz (d) 3.2 MHz to 10 MHz

$$\frac{A^2}{2}$$

75. What is the peak to average power ratio for the signal  $x(t) = A \sin(\omega t)$  with 50% duty cycle?
- (a) 0 dB (b) 1 dB
- (c) 3 dB (d) 6 dB

$$A^2 \frac{A^2}{A^2/2} \text{ (2) } \dots$$

76. A binary communication system receives equally likely symbols  $x_1(t)$  and  $x_2(t)$  plus Additive White Gaussian Noise at the input of matched detector. If the noise power spectral density ( $N_0$ ) is  $10^{-11} \text{ W/Hz}$ , compute  $E_b/N_0$  (in dB). Assume system characteristics impedance as  $1 \Omega$ .

$$\frac{2k}{5(s+2)}$$

$$1 + \frac{25kt}{5(s+2)}$$

$$\frac{2k}{s^2 + 2s + 25kt}$$

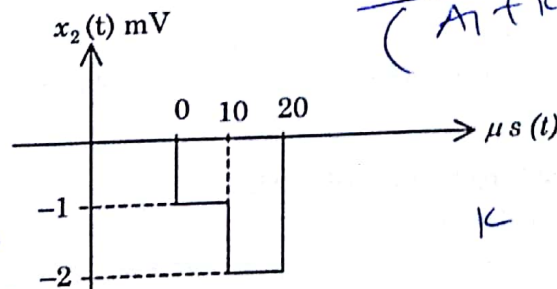
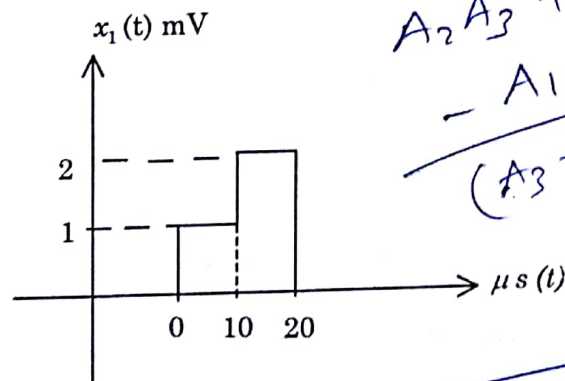
$$S_k = \frac{dT}{dt} \times \frac{k}{T}$$

$$T = \frac{A_1 + kA_2}{A_3 + kA_n}$$

$$\frac{dT}{dk} = \frac{(A_3 + kA_n)(A_2) - (A_1 + kA_2)(A_n)}{(A_3 + kA_n)^2}$$

- (a) 3 dB
- (c) 7 dB


- (b) 4 dB
- (d) 10 dB



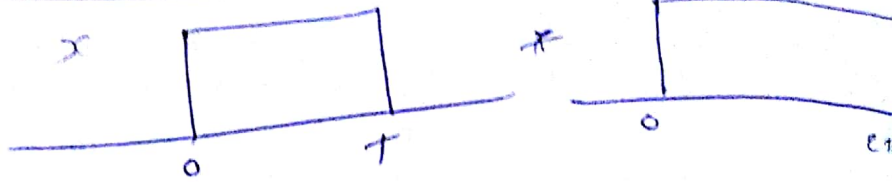
$$\frac{A_2 A_3 + k A_2 A_n - A_1 A_4 - k A_2 A_n}{(A_3 + k A_n)^2} \times \frac{k}{(A_1 + k A_2)}$$

$$(A_1 + k A_2) A_3$$



	<b>INDIAN SPACE RESEARCH ORGANISATION</b>	<b>SET C</b>
	<b>ELECTRONICS</b>	

77.  $x(t) = \begin{cases} 1, & 0 \leq t \leq T \\ 0, & \text{otherwise} \end{cases}$   
 $h(t) = \begin{cases} t, & 0 \leq t \leq 2T \\ 0, & \text{otherwise} \end{cases}$



Calculate  $y(t) = x(t) * h(t)$ , where  $*$  denotes convolution for interval  $T \leq t \leq 2T$

- (a) 0 (b)  $0.5t^2$  (c)  $Tt - 0.5T^2$  (d)  $-0.5t^2 + Tt + 2.5T^2$

78. Which of these is non-operational attribute of embedded system?

- (a) Response (b) Throughput (c) Security (d) Portability

79. For the below mentioned 8051 assembly code

Time elapse : MOV R0, #100  
 Part 1 : MOV R1, #50  
 Part 2 : MOV R2, #248  
 Part 3 : DJNZ R2, Part3  
           : DJNZ R1, Part2  
           : DJNZ R0, Part 1

Assumptions :

- Microcontroller is running at 12 MHz frequency and 1 machine cycle is having 12 clock cycles
- MOV instruction takes 1 Machine cycle
- DJNZ instruction takes 2 Machine cycle

Calculate time required for execution of Part 1

- (a)  $2495600 \mu s$  (b)  $2496300 \mu s$  (c)  $2495300 \mu s$  (d)  $2496600 \mu s$

80. A. Program Counter(PC) Pushed to Stack  
 B. Generate LCALL to ISR  
 C. Complete Execution of instruction in progress  
 D. Clear the interrupt flag  
 E. Set interrupt in progress

Correct order of execution of action taken by 8051 micro-controllers when an interrupt occurs:

- (a) C, A, D, E, B (b) A, B, D, E, C (c) C, D, B, E, A (d) A, C, B, D, E